

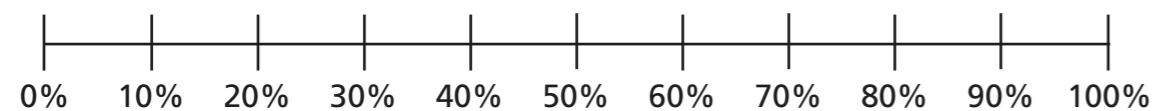
# Order FDP

1 Write  $<$ ,  $>$  or  $=$  to complete the statements.


- a)  $64\%$    $0.46$       d)  $0.8$    $80\%$   
 b)  $0.96$    $\frac{97}{100}$       e)  $67\%$    $\frac{7}{10}$   
 c)  $\frac{3}{5}$    $35\%$       f)  $\frac{7}{20}$    $0.3$

2 Draw arrows to estimate the positions of the fractions, decimals and percentages on the number line.

- a)  $9\%$      $\frac{9}{10}$      $0.99$      $19\%$



- b)  $\frac{2}{5}$      $0.52$      $45\%$      $0.2$



3 Write the fractions, decimals and percentages in ascending order.

- a)  $\frac{7}{10}$      $\frac{13}{100}$      $21\%$      $0.9$

\_\_\_\_\_

- b)  $0.6$      $61\%$      $\frac{37}{50}$      $0.66$

\_\_\_\_\_

- c)  $47\%$      $0.89$      $\frac{63}{100}$      $12\%$

\_\_\_\_\_

d) Which part was easiest to order: a), b) or c)? \_\_\_\_\_  
Why?

\_\_\_\_\_

\_\_\_\_\_

e) Which set was most difficult to order: a), b) or c)? \_\_\_\_\_  
Why?

\_\_\_\_\_

\_\_\_\_\_

f) Compare answers with a partner.  
What is the same and what is different?



4 These fractions, decimals and percentages are in descending order.

99%     $\frac{89}{100}$     0.7        0.5    49%

Tick the fractions, decimals and percentages that could fill the gap.

0.78    51%     $\frac{3}{5}$     0.6     $\frac{4}{10}$

5 Tommy scored  $\frac{40}{50}$  on a Maths test.

Aisha got 78% of the test correct.

Aisha thinks she has done better because 78 is greater than 40

Do you agree with Aisha? \_\_\_\_\_

Explain your answer.

---



---

6 Huan, Nijah and Scott each started with a 1-litre bottle of juice.

Huan drank 0.55 litres.

Nijah drank 59% of her juice.

Scott has  $\frac{4}{10}$  of his juice left.



Who drank the most? Show your working.

\_\_\_\_\_ drank the most.

Who drank the least? Show your working.

\_\_\_\_\_ drank the least.

7 a) Use the digit cards to make the statement correct.

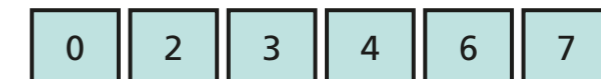


$$0.3 < \frac{\square}{10} < 80\%$$

How many different solutions can you find?

---

b) Use the digit cards to write a percentage greater than  $\frac{2}{5}$  but less than 75%.



$$\frac{2}{5} < \frac{\square}{10} < 0.75$$

How many different percentages can you find?

---

Compare answers with a partner.

